


Maths Chilli Challenge

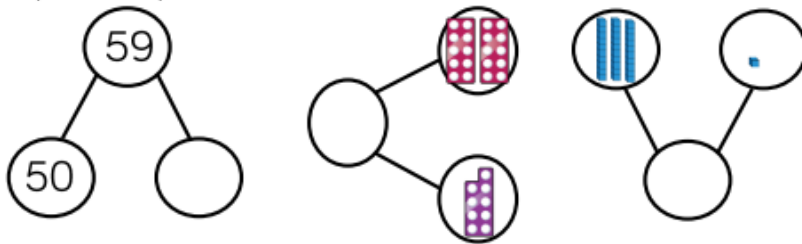


Look at the challenges below and choose a level of chilli you want to start with. If you feel confident doing that challenge, have a go at the next one!



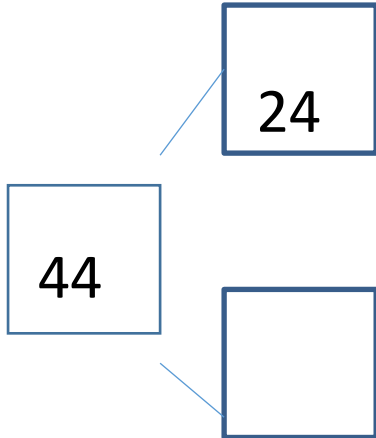
Mild Challenge 1

Complete the part-whole models.



Draw the below numbers using the pictorial method shown in the video.

Draw 44

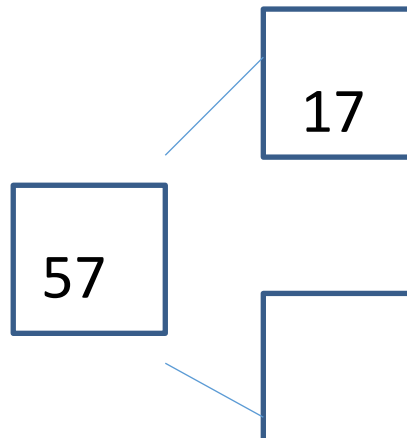


What is the part? _____

What is the part? _____

What is the whole? _____

Draw 57



What is the part? _____

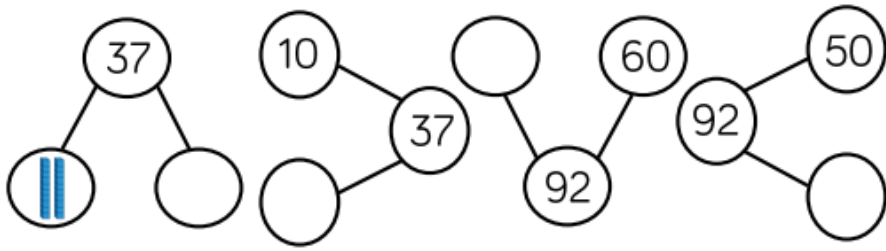
What is the part? _____

What is the whole? _____



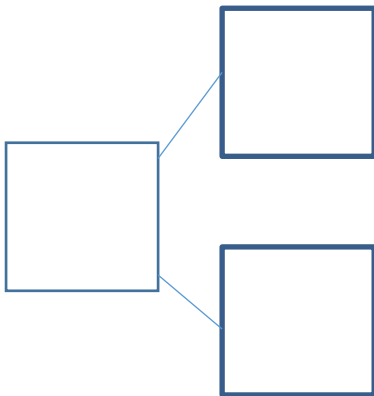
Medium – Challenge 2

Complete the part-whole models.



Draw the below numbers using the pictorial method shown in the video

Draw 17

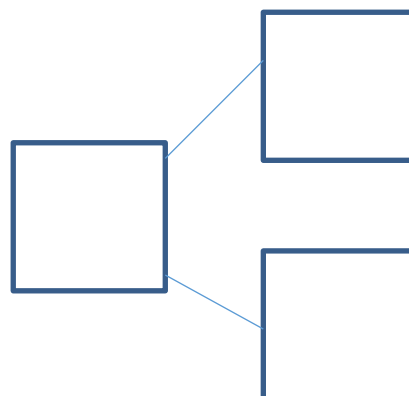


What is the part? _____

What is the part? _____

What is the whole? _____

Draw 64



What is the part? _____

What is the part? _____

What is the whole? _____



Hot – Challenge 3

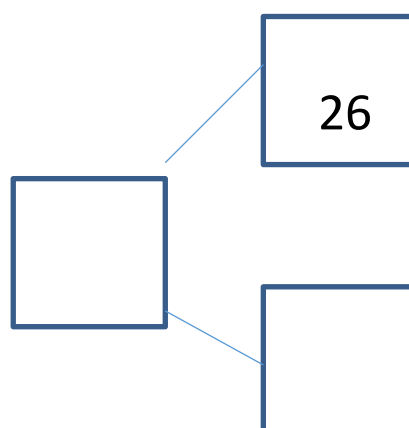
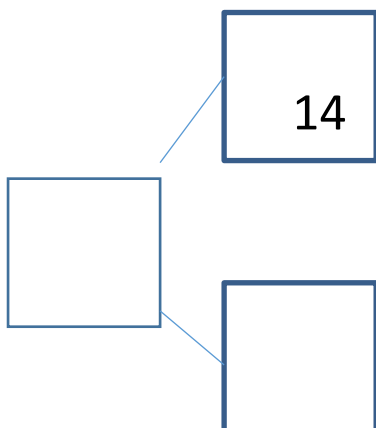
Using the pictorial method draw the below numbers in a part part whole model.

1/ 18

2/ 23

3/ 44

Complete the part part whole models.



What is the part? _____

What is the part? _____

What is the whole? _____

What is the part? _____

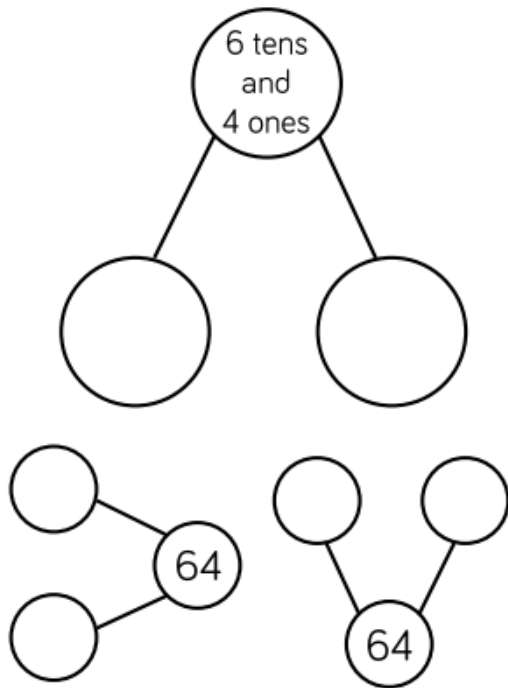
What is the part? _____

What is the whole? _____



Spicy

Complete each part-whole model in a different way.



Complete the extended part-whole model.

